



Name: _____ Date: _____

Fraction Worksheet




Whole = 1




Half = $\frac{1}{2}$

Name: _____ Date: _____


Fraction Worksheet



Whole = 1




Two Thirds = $\frac{2}{3}$




One Third = $\frac{1}{3}$

Name: _____ Date: _____


Fraction Worksheet




Whole = 1



Quarter = $\frac{1}{4}$



Half = $\frac{1}{2}$



Three quarters = $\frac{3}{4}$

Name: _____

Date: _____


Fraction Worksheet



Whole = 1



Five Sixths = $\frac{5}{6}$




Four Sixths = $\frac{4}{6}$



Three Sixths = $\frac{3}{6}$



Two Sixths = $\frac{2}{6}$




One Sixths = $\frac{1}{6}$


Name: _____

Date: _____


Fraction Worksheet



Whole = 1




Seven Eighths = $\frac{7}{8}$




Six Eighths = $\frac{6}{8}$




Five Eighths = $\frac{5}{8}$




Four Eighths = $\frac{4}{8}$



Three Eighths = $\frac{3}{8}$



Two Eighths = $\frac{2}{8}$



One Eighths = $\frac{1}{8}$
