

Name: \_\_\_\_\_ Date: \_\_\_\_\_

# Squares:

Say It! Write It! Repeat It!

Draw The Lines To Make The Squares Square:

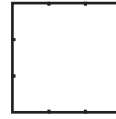
$1^2 = 1$




$2^2 = 4$



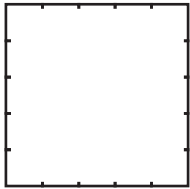
$3^2 = 9$



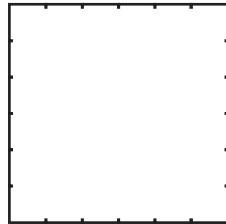
$4^2 = 16$



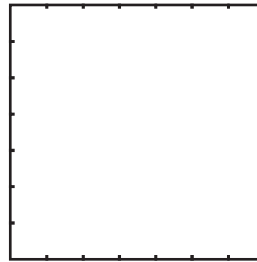
$5^2 = 25$




$6^2 = 36$




$7^2 = 49$



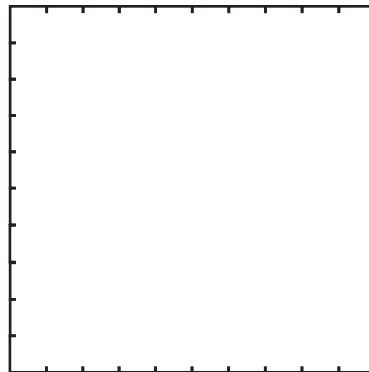
$8^2 = 64$




$9^2 = 81$



$10^2 = 100$



$11^2 = 121$



$12^2 = 144$

