

Name: _____ Date: _____

Square Roots

Draw The Lines To Make The Squares Square:

$1^2 = \underline{\quad}$



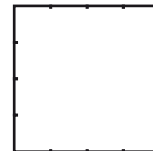
$2^2 = \underline{\quad}$



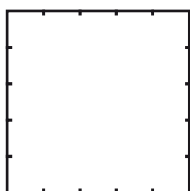
$3^2 = \underline{\quad}$



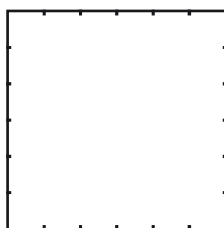
$4^2 = \underline{\quad}$



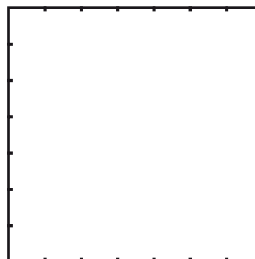
$5^2 = \underline{\quad}$



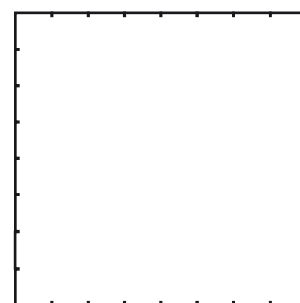
$6^2 = \underline{\quad}$




$7^2 = \underline{\quad}$



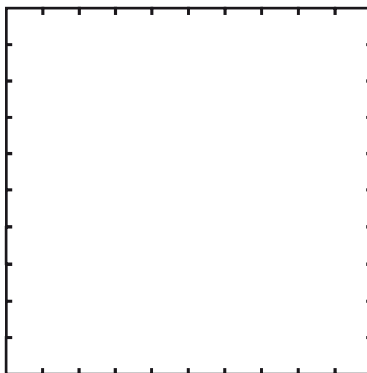
$8^2 = \underline{\quad}$



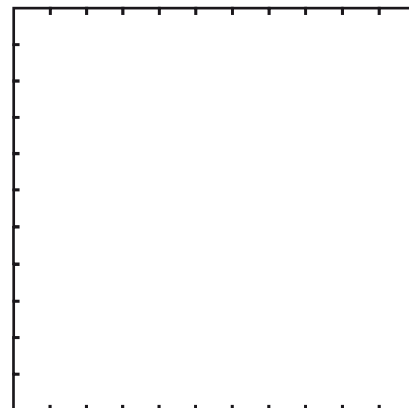
$9^2 = \underline{\quad}$



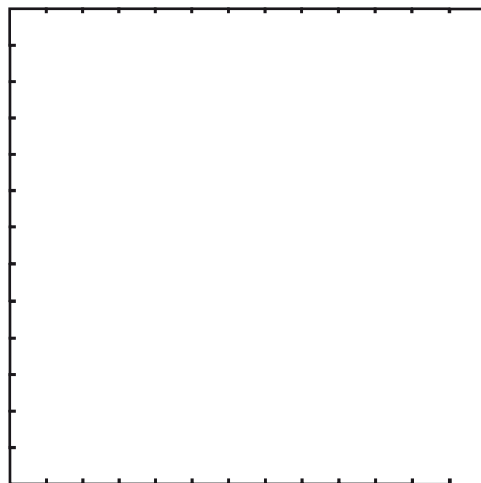

$10^2 = \underline{\quad}$



$11^2 = \underline{\quad}$



$12^2 = \underline{\quad}$



$13^2 = \underline{\quad}$