

Name: \_\_\_\_\_

Date: \_\_\_\_\_

# Square Roots

What Is The Square Root?

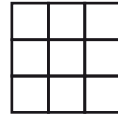
\_\_\_ = 1



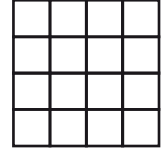
\_\_\_ = 4




\_\_\_ = 9




\_\_\_ = 16




\_\_\_ = 25




\_\_\_ = 36




\_\_\_ = 49




\_\_\_ = 64




\_\_\_ = 81




\_\_\_ = 100



\_\_\_ = 121



\_\_\_ = 144



\_\_\_ = 1

\_\_\_ = 4

\_\_\_ = 9

\_\_\_ = 16

\_\_\_ = 25

\_\_\_ = 36

\_\_\_ = 49

\_\_\_ = 64

\_\_\_ = 81

\_\_\_ = 100

\_\_\_ = 121

\_\_\_ = 144